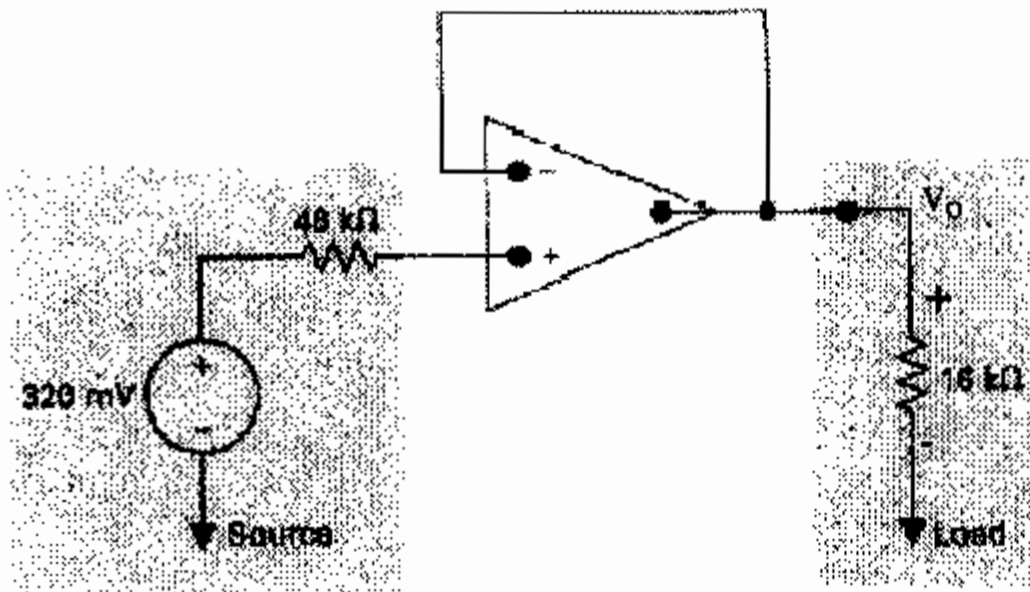


Homework #4 Solutions

Problem 1



Op amp is ideal operating in linear region:

$$V_p = V_n$$

$$i_n = i_p = 0$$

$$P = V_{16k\Omega}^2 / R$$

$$V_o = V_{16k\Omega}$$

(a) KCL at +ve terminal:

$$i_p = i_{48k\Omega} = 0$$

$$(320\text{mV} - v_p) / 48k\Omega = 0$$

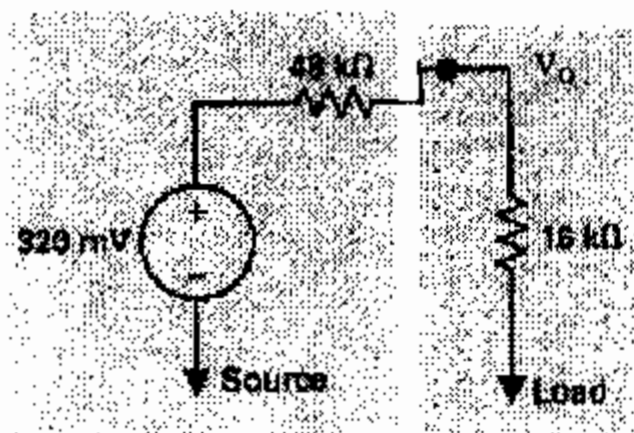
$$v_p = 320\text{mV}$$

$$V_p = V_n = V_o$$

$$P = (320\text{mV})^2 / 16k\Omega$$

$$P = 6.4\mu\text{W}$$

(b)

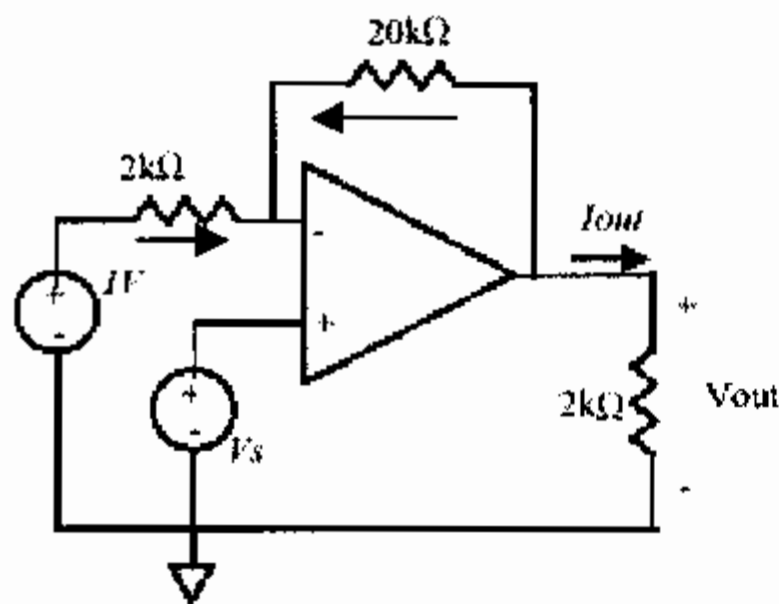


This is a simple voltage divider circuit; $v_o = (320\text{mV} \times 16\text{k}\Omega)/64\text{k}\Omega = 80\text{mV}$ which means that $P = (80\text{mV})^2/16\text{k}\Omega = 0.40\mu\text{W}$

c) $6.4\mu\text{W} / 0.40\mu\text{W} = 16$

d) Yes. This is like the unity-gain voltage follower circuit; the weak voltage source at the input can drive a heavy load at the output (like the $16\text{k}\Omega$) with the op amp providing the power.

Problem 2



a) Op amp is ideal and operating in linear region

$$v_s = v_p = v_n; i_n = i_p = 0$$

KCL at -ve terminal:

$$i_n = i_{2\text{k}\Omega} + i_{20\text{k}\Omega} = 0$$

$$(1 - v_n) / 2\text{k}\Omega + (v_{\text{out}} - v_n) / 20\text{k}\Omega = 0$$

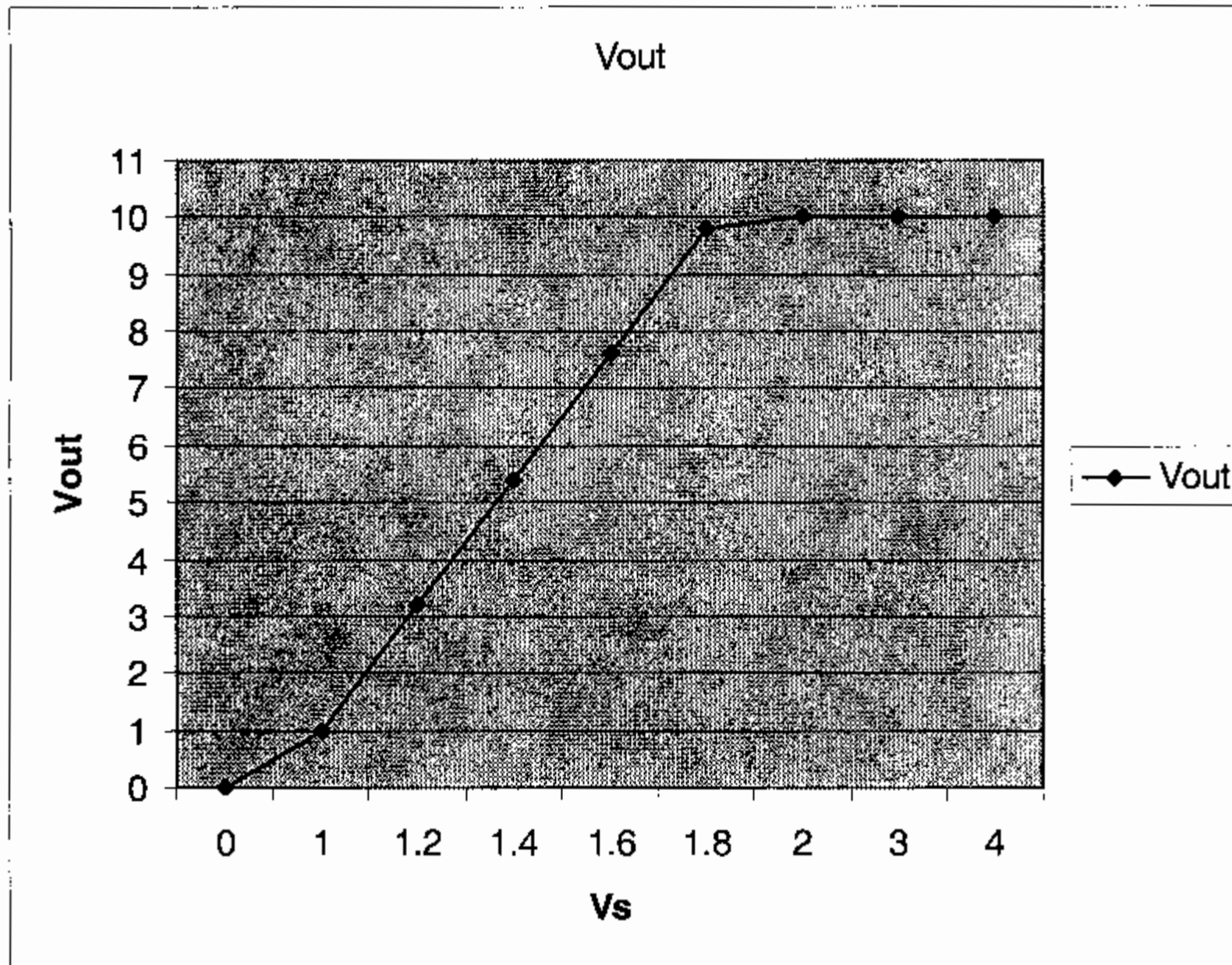
$$(v_s - 1) / 2\text{k}\Omega = (v_{\text{out}} - v_s) / 20\text{k}\Omega$$

$$20v_s - 20 = 2v_{\text{out}} - 2v_s$$

$$v_o = 11v_s - 10.$$

b)

V_s	$V_{\text{out}} = 11V_s - 10$
0	0
1	1
1.2	3.2
1.4	5.4
1.6	7.6
1.8	9.8
2	10
3	10
4	10



Problem 3

Op amp is ideal and operates in linear region.

$$v_n = v_p; i_n = i_p = 0.$$

$$R_a = 1k\Omega$$

KCL at -ve terminal:

$$i_{10k} + i_{R_f} = i_n = 0$$

$$0 - v_n/10k\Omega + (v_o - v_n)/R_f = 0$$

$$v_o = v_n(10k + R_f)/10k$$

$$\Rightarrow v_n = v_o 10k / (10k + R_f) \text{ [Note this is simple voltage division]}$$

$$\text{Let } z = 10k / (10k + R_f)$$

Now use superposition to find contribution of each voltage source to v_p .

Note contribution by v_a to v_o is $4v_a$:

$$\Rightarrow v_n = 4v_a \cdot z$$

Contribution of v_a to v_p is given by:

$$R_b || R_c \cdot v_a / (R_a + R_b || R_c) \text{ by voltage division}$$

$$\Rightarrow R_b || R_c / (R_a + R_b || R_c) = 4z$$

Similarly, for v_b which contributes $2v_b$ to v_o :

Contribution of v_b to v_p is given by:
 $R_a || R_c \cdot v_b / (R_b + R_a || R_c)$ by voltage division
 $\Rightarrow R_a || R_c / (R_b + R_a || R_c) = 2z$

And, for v_c which contributes v_c to v_o :
 Contribution of v_c to v_p is given by:
 $R_a || R_b \cdot v_c / (R_c + R_a || R_b)$ by voltage division
 $\Rightarrow R_a || R_b / (R_c + R_a || R_b) = z$

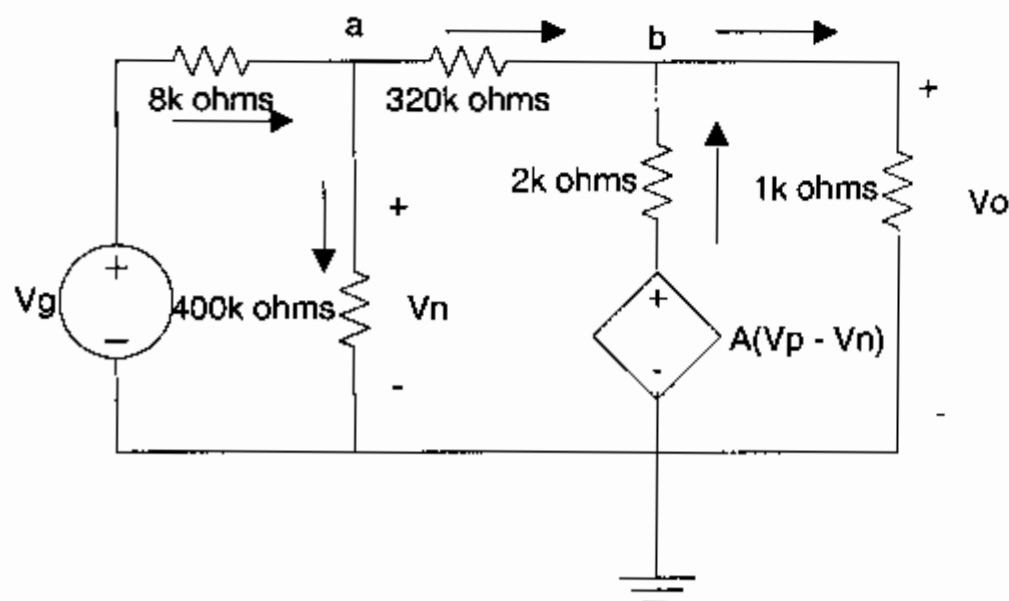
Then using the above equations we can solve for R_b and R_c :
 $\Rightarrow R_b || R_c / (R_a + R_b || R_c) = 4 \cdot R_a || R_b / (R_c + R_a || R_b)$
 $\Rightarrow R_b \cdot R_c / (R_a R_b + R_a R_c + R_b R_c) = 4 R_a \cdot R_b / (R_a R_b + R_a R_c + R_b R_c) \cdot$
 $\Rightarrow R_c = 4R_a$
 $\Rightarrow \mathbf{R_c = 4k\Omega}$

$R_a || R_c / (R_b + R_a || R_c) = 2 \cdot R_a || R_b / (R_c + R_a || R_b)$
 $\Rightarrow R_a \cdot R_c / (R_a R_b + R_a R_c + R_b R_c) = 2 R_a \cdot R_b / (R_a R_b + R_a R_c + R_b R_c) \cdot$
 $\Rightarrow R_c = 2R_b$
 $\Rightarrow \mathbf{R_b = 2k\Omega}$

Then $z = 10k / (10k + R_f) = R_a || R_b / (R_c + R_a || R_b) = 1k || 2k / (4k + 1k || 2k) = 1/7$
 $\Rightarrow \mathbf{R_f = 60k\Omega}$

Problem 4

a) Redraw the circuit as follows:



Note: $V_p = 0$; $V_n = V_a$; $V_b = V_o$
 KCL at node a:
 $V_a / 400k + (V_a - V_b) / 320k = (V_g - V_a) / 8k$
 $\Rightarrow V_a + 1.25V_a - 1.25V_b = 50V_g - 50V_a$
 $\Rightarrow V_g = 1.045V_a - 0.025V_b$

KCL at node b:

$$(V_a - V_b)/320k + (A(-V_n) - V_b)/2k = V_b/1k$$

$$\Rightarrow (1 - 160A)V_a - 161V_b = 320V_b$$

$$\Rightarrow V_a = 481V_b/(1-160A)$$

$$V_g = 1.045[481V_b/(1-160A)] - 0.025V_b$$

$$V_g = -0.0250062V_o$$

$$V_o/V_g = -39.99$$

$$V_o/V_g \approx -40$$

Another solution is to use equation 5.49 in the textbook to determine V_o :

$$V_o/V_g = -A + (R_o/R_f) / (R_s/R_f)(1 + A + R_o/R_i + R_o/R_L) + (1 + R_o/R_L)(1 + R_s/R_i) + R_o/R_f$$

Substituting the values for all the variables, we get:

$$V_o/V_g = -500\,000 + (2k/320k) / (8k/320k)(1 + 500\,000 + 2k/400k + 2k/1k) + (1 + 2k/1k)(1 + 8k/400k) + 2k/320k$$

$$V_o/V_g = -39.99$$

$$V_o/V_g \approx -40$$

b) Ideal op amp in linear region; $V_n = V_p$; $I_n = I_p = 0$; we can directly apply the result for an inverting amplifier as derived in class:

$$V_o = -R_f \times V_s/R_s$$

$$R_f = 320k\Omega, R_s = 8k\Omega, V_s = V_g$$

$$V_o/V_g = -320/8 = -40$$